

O. P. JINDAL SCHOOL, SAVITRI NAGAR

Half Yearly Examination (2025 – 2026)

Class / Section: I ()

MM: 40

Subject: Mathematics

Time: 2:15 Hrs.

Name: _____ Roll No.: _____


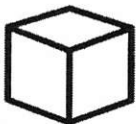


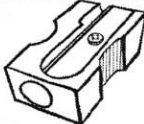

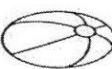


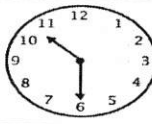


Invigilator's Sign: _____ Marks Obtained: _____ Examiner's Sign: _____

(Fifteen Minutes Extra will be given for reading the Question Paper.)

General Instructions: All questions are compulsory.

1) Match the following.

(3 Marks)





2) Write the numbers from the biggest to the smallest.

(2 Marks)

20 , 13 , 6 , 11 → _____ , _____ , _____ , _____

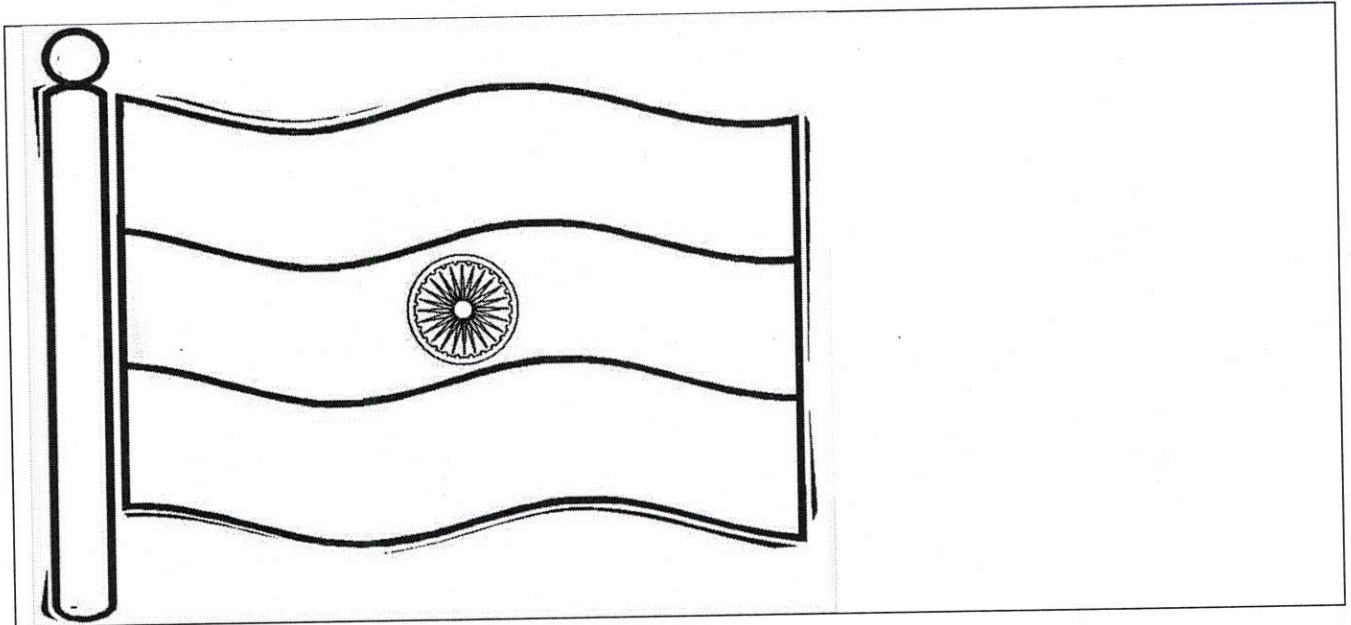
3) Tick (✓) the correct option.

(4 Marks)

	i) The man is sitting inside/outside/on the car.
	ii) The bird is sitting under/ inside/ on the house.
	iii) The dog is lying above/ under / on the table.
	iv) The man is under/ inside/ outside the car.

4) Colour it and circle the correct answers .

(4 Marks)



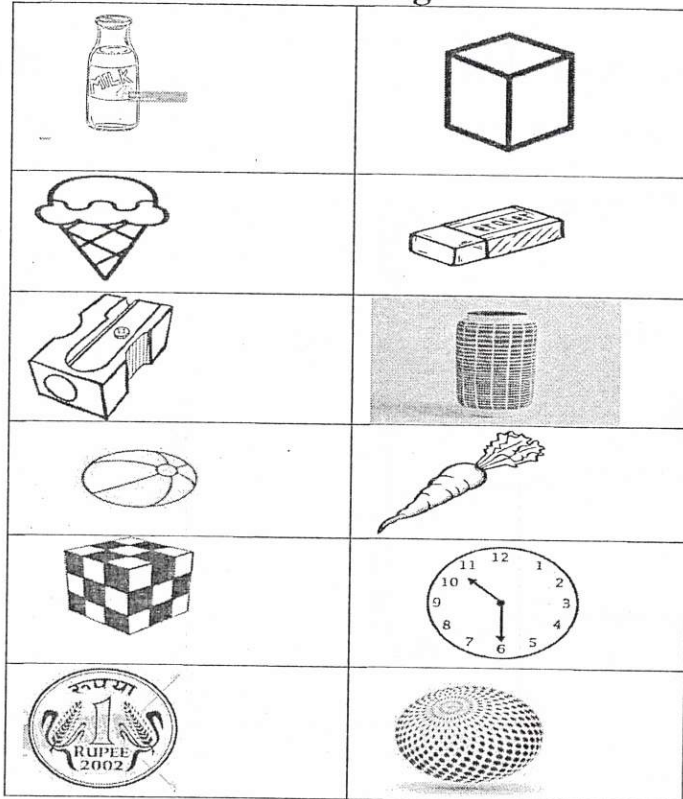
i) Which colour is at the top of the Tiranga? (White/Saffron/Green)

ii) Where is the ashoka chakra on the Tiranga?(on a corner/in the middle)

O. P. JINDAL SCHOOL, SAVITRI NAGAR**Half Yearly Examination (2025 – 2026)****Class / Section: I ()****MM: 40****Subject: Mathematics****Time: 2:15 Hrs.**

Name: _____ Roll No.: _____





Invigilator's Sign: _____ Marks Obtained: _____ Examiner's Sign: _____

(Fifteen Minutes Extra will be given for reading the Question Paper.)General Instructions: All questions are compulsory.**1) Match the following.****(3 Marks)****2) Write the numbers from the biggest to the smallest.****(2 Marks)**

20 , 13 , 6 , 11 → _____ , _____ , _____ , _____

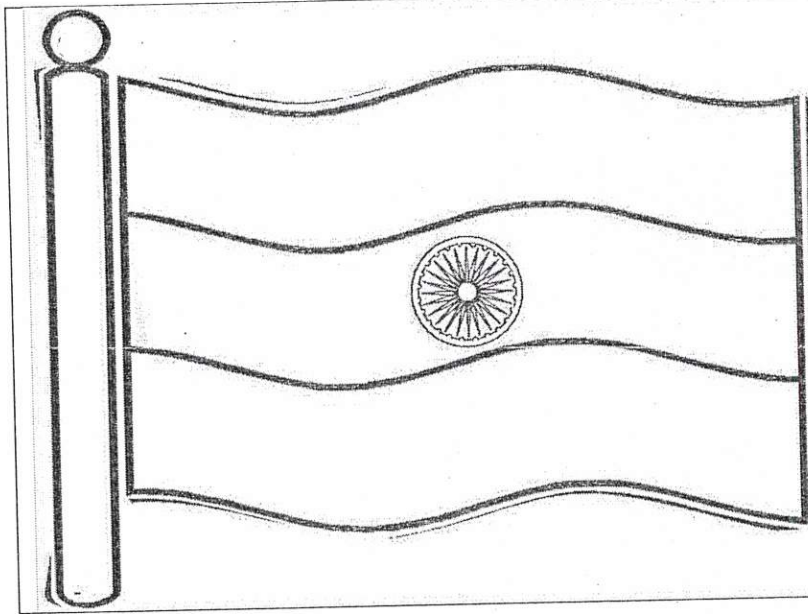
3) Tick (✓) the correct option.

(4 Marks)

	i) The man is sitting inside/outside/on the car.
	ii) The bird is sitting under/ inside/ on the house.
	iii) The dog is lying above/ under / on the table.
	iv) The man is under/ inside/ outside the car.

4) Colour it and circle the correct answers .

(4 Marks)




i) Which colour is at the top of the Tiranga? (White/Saffron/Green)

ii) Where is the ashoka chakra on the Tiranga?(on a corner/in the middle)

5) Draw a path from numbers 1 to 9 in the correct order. The line should not cross each other. (2 Marks)

8	7	6
9	2	5
1	3	4

6) Tick (✓) the one which is less in number. (1 Marks)



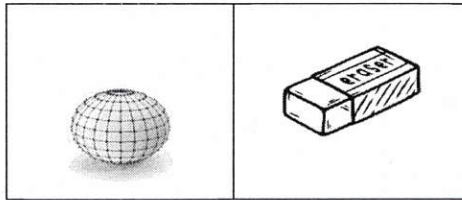
7) Write down the numbers in sequence. (2 Marks)

1	2		
8		6	5
	10	11	12


8) Tick (✓) the correct object .

(3 Marks)


i) That rolls



ii) That slides



iii) That rolls as well as slides

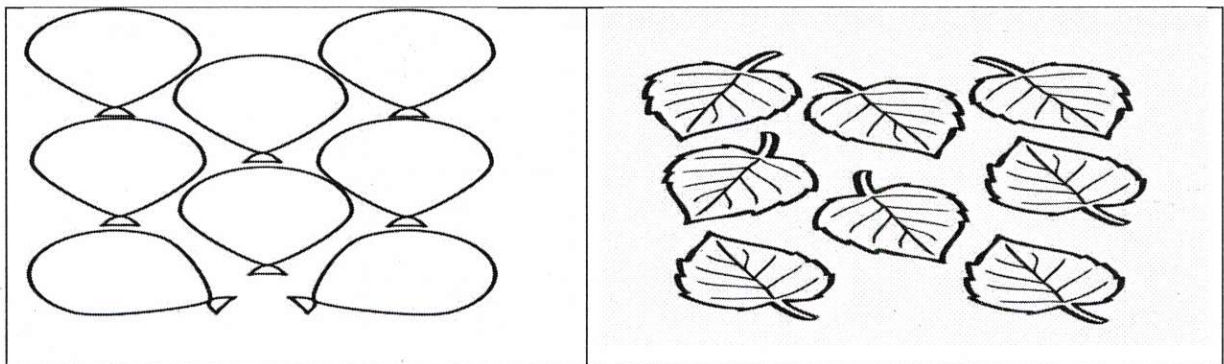


9) Count and colour.

(2Marks)

i) 6 balloons

ii) 4 leaves



10) Add and match the following.

(4 Marks)

1 + 4	8	6 + 1
5 + 4	7	7 + 2
0 + 7	9	3 + 5
4 + 4	5	3 + 2

11) Word problems.

(4 Marks)

i) There are 18 seats in a bus. If 9 children are already sitting in it, how many more children can sit inside the bus ?

$$\underline{\hspace{2cm}} - \underline{\hspace{2cm}} = \underline{\hspace{2cm}}$$

ii) Riya has 11 bangles, she got 7 more from her sister. How many bangles does she have now ?

$$\underline{\hspace{2cm}} + \underline{\hspace{2cm}} = \underline{\hspace{2cm}}$$

12) Solve.

(4 Marks)

i) 6

+ 0

ii) 9

- 6

iii) 8

+ 1

iv) 5

- 4

13) Write the number names.

(2 Marks)

i) 17 → _____

ii) 20 → _____

14) Hop and find the sum.

(3 Marks)

1	2	3	4	5	6	7	8	9	10	11	12	13	14
---	---	---	---	---	---	---	---	---	----	----	----	----	----

i) $7 + 5 =$ _____

1	2	3	4	5	6	7	8	9	10	11	12	13	14
---	---	---	---	---	---	---	---	---	----	----	----	----	----

ii) $11 + 2 =$ _____

1	2	3	4	5	6	7	8	9	10	11	12	13	14
---	---	---	---	---	---	---	---	---	----	----	----	----	----

iii) $6 + 3 =$ _____
